

Observe and Answer

Skills Covered: • Observation • Decision-making
• Critical and logical thinking

Look at the picture given below and fill in the blanks.




1. The _____ on the underside of snake's body enables it to move.
2. Butterfly has _____ to fly.
3. Frogs use their _____ feet to swim.
4. Rabbit _____ to move from one place to another.

Creative Corner

(Integrated Learning–Art)
Skills Covered: • Observation • Creativity

Colour the given picture and answer the questions that follow.



1. Name the animal. _____
2. Where does it live? _____
3. Write the adaptations of this animal.

Life Skills

Skills Covered: • Observation • Critical and logical thinking • Investigation
• Decision-making • Social and emotional skills

Roshan and his family visit a bird sanctuary. There are many varieties of birds in the bird sanctuary. Some of the birds belong to endangered species. Roshan is very excited to see the beautiful birds and he starts clicking pictures. His mother tells him not to go very close to the birds. Apart from birds, there are snakes, lizards and other reptiles also in the bird sanctuary.



1. Name any three birds that can be seen in a bird sanctuary.

(a) _____ (b) _____ (c) _____

2. How do birds move on land, water and air?

3. Are there birds that cannot fly? If yes, write the names of any two of them.

4. Why did Roshan's mother tell him not to go very close to the birds?

5. Have you ever visited a bird sanctuary?

Yes

No




Fun with Learning

Skills Covered: • Critical and logical thinking
• Decision-making

Fill in the blanks using suitable words from the word search puzzle given below.



U	F	L	A	G	E	K	K	I	G	F	H	Q
D	A	P	T	A	T	I	O	N	H	O	C	P
T	H	C	C	A	R	N	I	V	O	R	E	E
H	E	R	B	I	V	O	R	E	O	E	C	C
A	A	V	E	R	T	E	B	R	A	S	E	O
B	R	V	F	R	E	S	H	W	A	T	E	R
I	O	V	I	A	S	N	U	E	V	I	W	Y
T	A	N	A	O	T	W	L	B	E	R	J	S
A	C	T	M	T	R	O	I	R	E	R	D	T
T	X	V	U	F	E	A	T	H	E	R	S	E
F	E	B	Z	Z	N	O	T	T	H	H	M	M
N	I	V	O	R	E	T	N	E	P	Q	J	G
A	J	H	D	N	T	H	M	R	W	X	P	V



1. _____ is the place where an animal is naturally found.
2. A _____ feeds on plants whereas a _____ feeds on other animals.
3. A region that is covered densely by different varieties of plants and trees is called _____.
4. Ponds, lakes and rivers are examples of _____ habitat.
5. _____ help birds to fly.

Competitive Corner

Skills Covered: • Critical and logical thinking
• Decision-making • Reasoning

Choose the correct answer.

1. Given below are different animal habitats. Find the mismatched pair.
(a) Terrestrial – land
(b) Amphibians – burrow
(c) Aquatic – water
(d) Amphibians – land and water
2. The scaly skin of snakes _____.
(a) makes them beautiful
(b) helps them to crawl
(c) protects them from enemies
(d) helps them to walk
3. Which of the following adaptive characteristics may help animals to survive in polar regions?
(a) Light weight wings to fly.
(b) Growth of thick fur on its body.
(c) Less hairy skin.
(d) Webbed feet to swim.
4. In which of the following processes do birds travel long distances to support their life in adverse conditions?
(a) Adaptation
(b) Migration
(c) Hibernation
(d) Locomotion
5. A/An _____ gives birth to young ones, have hair and have external ears.
(a) amphibian
(b) mammal
(c) bird
(d) fish
6. Out of the following animals, find the odd one out.
(a) Vulture
(b) Wolf
(c) Hyena
(d) Crow

7. Choose the incorrect statement.

- (a) Termites crawl.
- (b) Ducks have webbed feet.
- (c) Dolphin is a bird.
- (d) Lion is a terrestrial animal.

8. Animals migrate _____.

- (a) for food
- (b) to avoid natural calamities
- (c) for food and to avoid natural calamities
- (d) for swimming

Put on Your Reasoning Caps – HOTS

Skills Covered: • Critical and logical thinking
• Analytical reasoning

Give reasons for the following statements.

1. Ostrich, emu and kiwi cannot fly.
2. Animals and birds migrate periodically.
3. Animals have different types of body coverings.
4. Birds can fly in the air.