







1

Things around Us

Observe and Answer

Skills Covered: • Observation • Decision-making
• Critical and logical thinking

Observe the pictures and answer the questions that follow.



1. Write the names of living things shown in the pictures.

2. Write the names of non-living things shown in the pictures.

3. Name one non-living thing that you can eat. _____


4. Name the thing that shows movement towards the sun. _____

Creative Corner

(Integrated Learning-Art)

Skills Covered: • Observation • Creativity

Colour the picture given below and answer the questions that follow.



1. Name one living thing that you see in the picture. _____
2. Does this living thing show movement? Yes No
3. Name two non-living things that you see in the picture.

4. Name one non-living thing that can move and one that cannot move.

Life Skills

Skills Covered: • Observation • Critical and logical thinking • Investigation
• Decision-making • Social and emotional skills

Saloni and her mother decide to make a garden in front of their house. They first prepare the soil and then plant seeds in their garden. The mother checks for the growth of weeds in between the plants frequently. Saloni waters the plants regularly and takes good care of them. After one month, the garden blooms with beautiful flowers. Saloni tells her friends about it and asks her friends to grow a beautiful garden in front of their houses as well.



1. What do plants need to grow?

2. Do plants move and grow in the direction of sunlight? Yes No
3. Can plants make their own food? Yes No
4. How do plants breathe?

5. Why should we grow plants?

Fun with Learning

Skills Covered: • Critical and logical thinking
• Decision-making

Find out the given words in the word search puzzle. Use these words to fill in the blanks.

BREATHE GROW REPRODUCE STOMATA GILLS

1. Fish breathe through _____.
2. Living things _____ to give birth to their young ones
3. The _____ are present in the leaves of plants.
4. All living things _____.
5. We use our nose to _____.

B	K	C	G	I	B	E	J	G
R	E	P	R	O	D	U	C	E
E	A	D	O	Q	E	D	R	F
A	H	L	W	G	A	P	M	F
T	U	T	X	G	I	L	L	S
H	N	W	V	O	Z	C	S	B
E	Y	S	T	O	M	A	T	A

Competitive Corner

Skills Covered: • Critical and logical thinking
• Decision-making • Reasoning

Choose the correct answer.

1. Which of the following things grows?
(a) Water (b) Desk (c) Hen (d) Pen
2. Most plants reproduce with the help of _____.
(a) air (b) water (c) seed (d) sunlight
3. Which of these groups refers only to living things?
(a) Clouds, rivers, rocks (b) Fire, rivers, trees
(c) Birds, trees, worms (d) Car, scooter, train
4. A car moves and it is a _____.
(a) living thing (b) non-living thing
(c) natural thing (d) living and natural thing
5. Which of the following gives birth to young babies?
(a) Crow (b) Buffalo (c) Fish (d) Pigeon

Put on Your Reasoning Caps – HOTS

Skills Covered: • Critical and logical thinking
• Analytical reasoning

Give reasons for the following statements.

1. Living things die but non-living things do not die.
2. Movement is important for animals.
3. Plants show movement.
4. Living things feel.